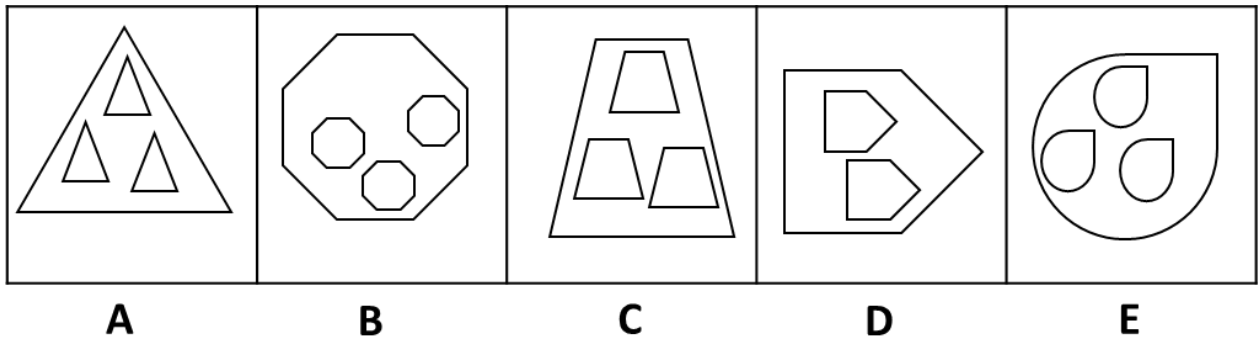




Type 6 – Odd One Out

In each of the rows below there are five figures. Find the figure that is most **unlike** the other four.

EXAMPLE:



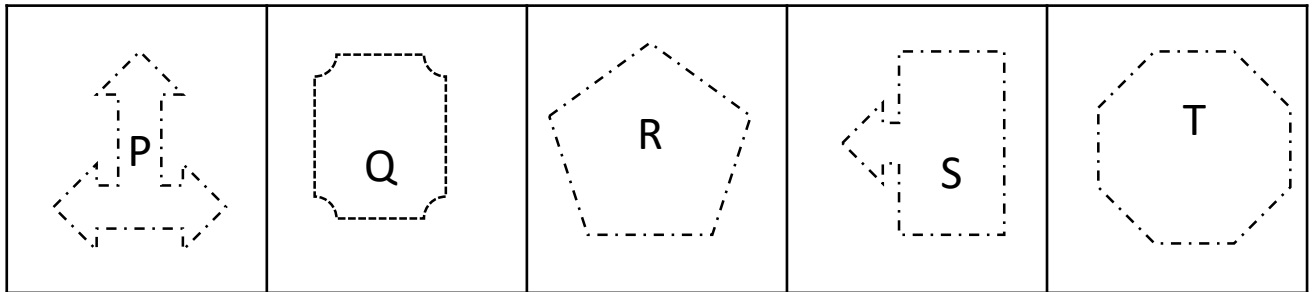
Solution

Each outer shape contains three mini versions of itself on the inside (3 small triangles inside a large one, 3 small octagons inside a small one, etc). D is the odd one out as it only contains 2 shapes inside the large, outer shape. Therefore – Answer D.



Type 6 – Odd One Out

Question 1



A

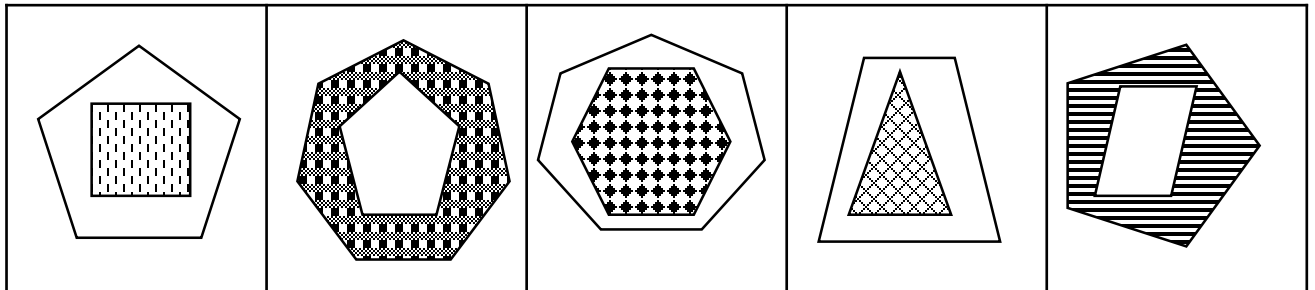
B

C

D

E

Question 2



A

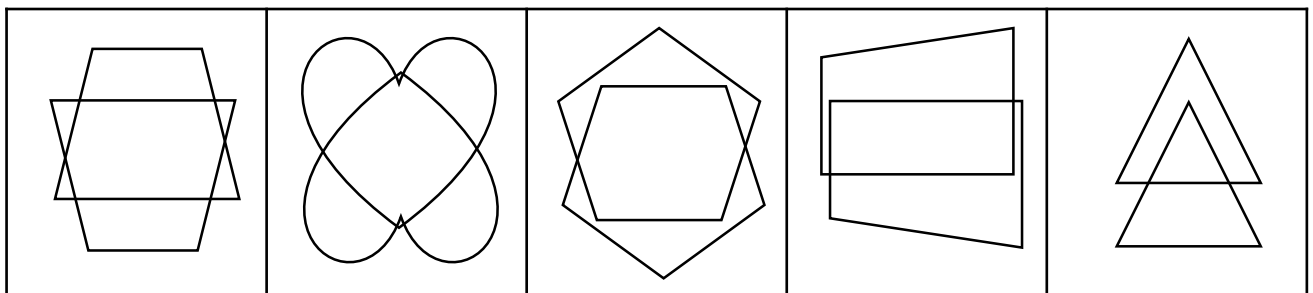
B

C

D

E

Question 3



A

B

C

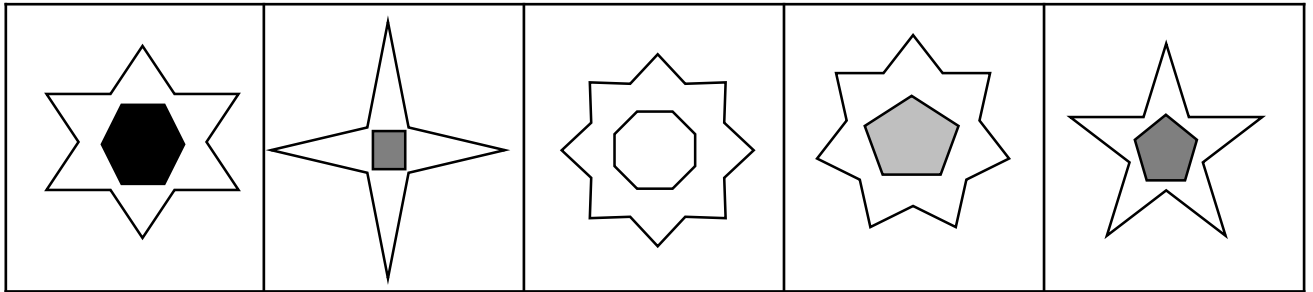
D

E



Type 6 – Odd One Out

Question 4



A


B

C

D

E

Question 5



A

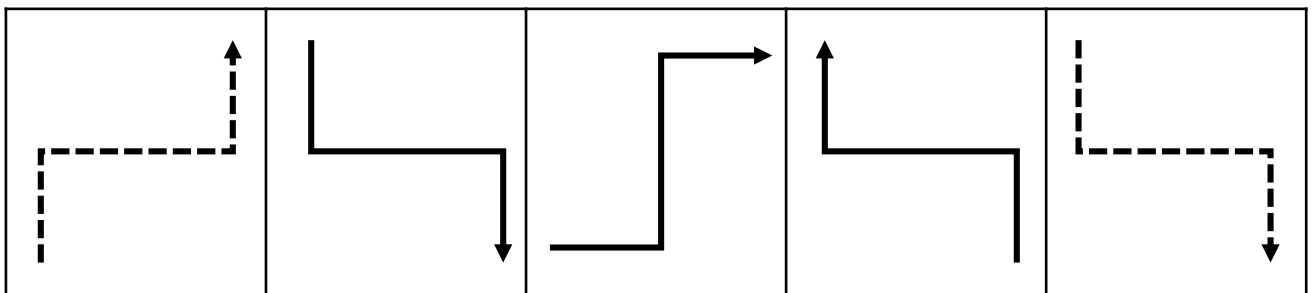
B

C

D

E

Question 6



A

B

C

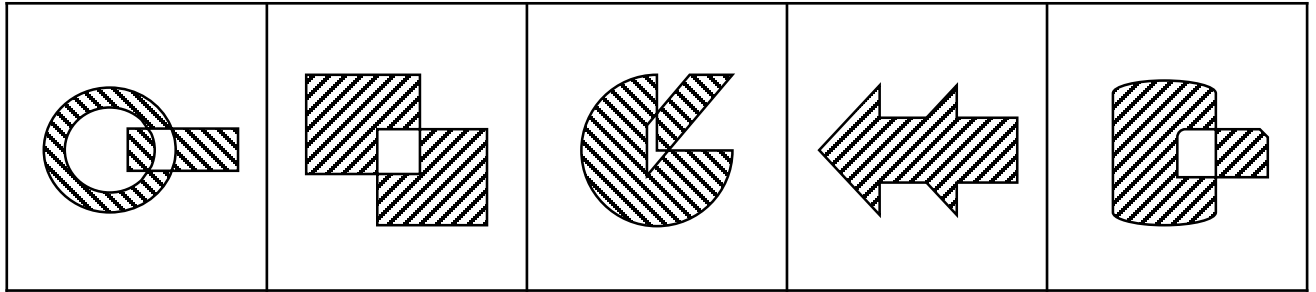
D

E



Type 6 – Odd One Out

Question 7



A


B

C

D

E

Question 8



A

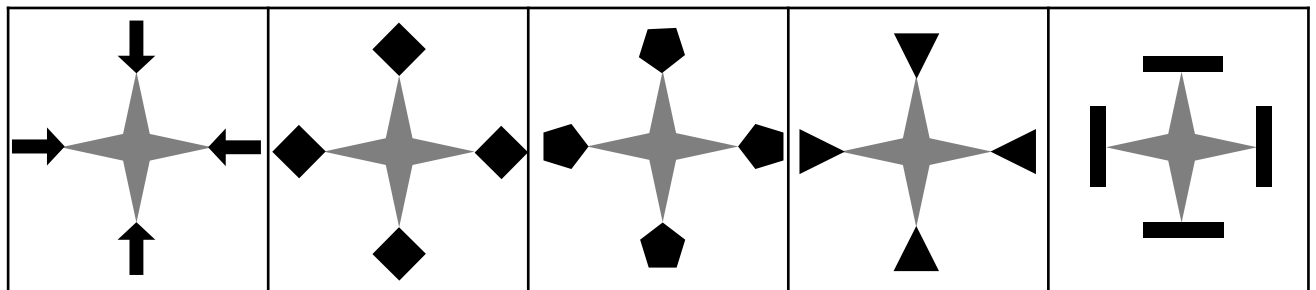
B

C

D

E

Question 9



A

B

C

D

E



Type 6 – Odd One Out

Question 10

--	--	--	--	--

A

B

C

D

E



Answers – Type 6 Odd One Out

Question	Answer	Explanation
1	B	B is the only one with the outer shape having a dashed border.
2	B	The inner shape has one side less than the outer shape, except for B.
3	E	The only one where the lower shape is not upside-down compared to the upper shape.
4	D	The inner shape has the same number of sides as the number of points on the outer star shape, except D.
5	C	The only one where the oval nose is vertical not horizontal.
6	A	A is a left turn, the rest are right turns.
7	D	The only one where the overlap between 2 shapes is not whited out.
8	A	Only the letter 'L' is made up of 2 straight bars; the rest are made of 3 straight bars.
9	E	The only one where the small surrounding shapes are not joined to the star's points at their corners.
10	C	The only one where the number of black and white shapes do not match.